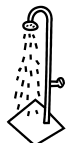
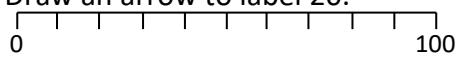
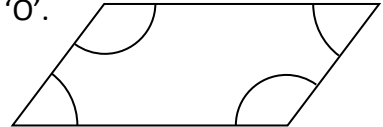
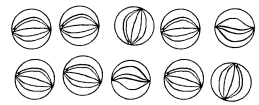
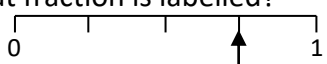
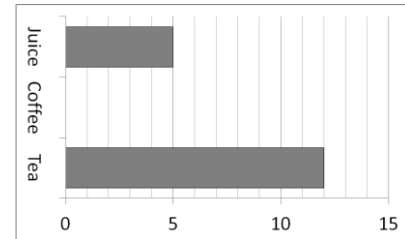
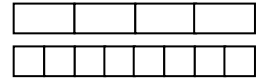


Name: \_\_\_\_\_

Date: \_\_\_\_\_

Class/Group: \_\_\_\_\_

A: Place Value, Add and Subtract		B: Multiply, Divide and Fractions		C: Measure, Geometry and Statistics	
1. What is the missing number? 0 8 16 <input type="text"/> 32	3:1	11. $21 \div 3 =$	3:10	23. About how long does it take to have a shower? a. 10 seconds b. 1 minute c. 10 minutes	3:23
2. What is the 5 worth in this number? 536	3:2	12. $7 \times 4 =$	3:10		
3. Put these in order, smallest first. 635 563 536 365	3:3	13. Use $9 \times 5 = 45$ to solve: $450 \div 9 =$	3:11	22. Which of these is a description of a square based pyramid? a. I have 5 faces and 5 vertices. b. I have 8 edges and 6 vertices. c. I have 6 faces and 8 edges.	3:25
4. Draw an arrow to label 20. 	3:4	14. Eggs come in boxes of 6. I need 16 eggs. How many boxes should I buy?	3:12		
5. Circle all the <b>multiples</b> of 50. 25 100 75 125 150	3:5	15. If you split a shape into tenths, how many equal parts do you have?	3:13	23. Label two obtuse angles using the letter 'O'. 	3:26
6. $139 - 100 =$	3:6	16. Circle $\frac{2}{5}$ of the marbles. 	3:14		
7. $325 + 274 =$	3:7	17. What fraction is labelled? 	3:15	24. Favourite drinks of teachers: 	3:29
8. Write the sum to check $68 - 29 = 39$ . Check: $29 + \square = \square$	3:8	18. $\frac{6}{8} = \frac{?}{4}$ 	3:16	13 people said coffee. Show this.	
9. To a no. I add 32 then subtract 17. I now have 40. What did I start with?	3:9	19. Subtract the fractions. $\frac{4}{5} - \frac{3}{5}$	3:17	25. How many more people said 'Tea' than said 'Juice'?	3:30
10. What is the missing number? $178 + \square = 236$	3:9	20. Write the largest fraction. $\frac{5}{9} \frac{1}{9} \frac{7}{9} \frac{3}{9}$	3:18		
Total (A)		Total (B)		Total (C)	
Test Total (A+B+C)		R (0-9)	Y (10-19)	G (20-25)	