
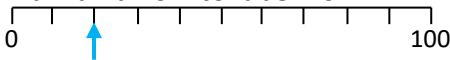

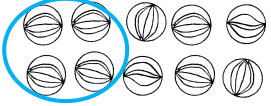
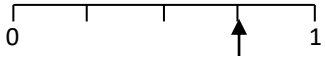
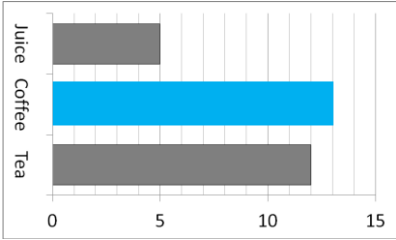
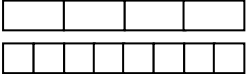


Name: \_\_\_\_\_

Date: \_\_\_\_\_

Class/Group: \_\_\_\_\_

A: Place Value, Add and Subtract		B: Multiply, Divide and Fractions		C: Measure, Geometry and Statistics	
1. What is the missing number? 0 8 16 <input type="text"/> 32	3:1 <b>24</b>	11. $21 \div 3 =$	3:10 <b>7</b>	23. About how long does it take to have a shower? <b>a.</b> 10 seconds <b>b.</b> 1 minute <b>c.</b> 10 minutes	3:23 <b>c</b>
2. What is the <b>5</b> worth in this number? 536	3:2 <b>500</b> (hundreds)	12. $7 \times 4 =$	3:10 <b>28</b>		
3. Put these in order, smallest first. 635 563 536 365	3:3 <b>365, 536,</b> <b>563, 635</b>	13. Use $9 \times 5 = 45$ to solve: $450 \div 9 =$	3:11 <b>50</b>	22. Which of these is a description of a square based pyramid? <b>a.</b> I have 5 faces and 5 vertices. <b>b.</b> I have 8 edges and 6 vertices. <b>c.</b> I have 6 faces and 8 edges.	3:25 <b>a</b>
4. Draw an arrow to label 20. 	3:4 <b>Arrow</b>	14. Eggs come in boxes of 6. I need 16 eggs. How many boxes should I buy?	3:12 <b>3</b>		
5. Circle all the <b>multiples</b> of 50. 25 <b>100</b> 75 125 <b>150</b>	3:5 <b>100, 150</b>	15. If you split a shape into tenths, how many equal parts do you have?	3:13 <b>10</b>	23. Label two obtuse angles using the letter 'O'. 	3:26 <b>Angles labelled</b>
6. $139 - 100 =$	3:6 <b>39</b>	16. Circle $\frac{2}{5}$ of the marbles. 	3:14 <b>4</b>		
7. $325 + 274 =$	3:7 <b>599</b>	17. What fraction is labelled? 	3:15 <b><math>\frac{3}{4}</math></b>	24. Favourite drinks of teachers: 	3:29 <b>Bar drawn</b>
8. Write the sum to check $68 - 29 = 39$ . Check: $29 + \square = \square$	3:8 <b>39, 68</b>	18. $\frac{6}{8} = \frac{?}{4}$ 	3:16 <b>3</b>	13 people said coffee. Show this.	
9. To a no. I add 32 then subtract 17. I now have 40. What did I start with?	3:9 <b>25</b>	19. Subtract the fractions. $\frac{4}{5} - \frac{3}{5}$	3:17 <b><math>\frac{1}{5}</math></b>		
10. What is the missing number? $178 + \square = 236$	3:9 <b>58</b>	20. Write the largest fraction. $\frac{5}{9}$ $\frac{1}{9}$ $\frac{7}{9}$ $\frac{3}{9}$	3:18 <b><math>\frac{7}{9}</math></b>	25. How many more people said 'Tea' than said 'Juice'?	3:30 <b>7</b>
Total (A)		Total (B)		Total (C)	
Test Total (A+B+C)		R (0-9)		Y (10-19)	
				G (20-25)	