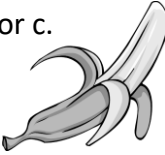





Name: \_\_\_\_\_

Date: \_\_\_\_\_

Class/Group: \_\_\_\_\_

A: Place Value, Add and Subtract		B: Multiply, Divide and Fractions		C: Measure and Geometry	
1. What is the missing number? 0 2 4 6 <input type="text"/> 10 12	2:1	11. $35 \div 5 =$	2:11	21. <b>Estimate</b> the weight of a banana. Write a, b or c. a. about 15g b. about 150g c. about 15kg	2:17
2. What is the <b>value</b> of the <b>4</b> in this number? 49	2:2	12. Which are the odd numbers? 3 6 9 12	2:11		
3. What number is labelled? 	2:3	13. What symbol is missing? $4 \square 6 = 24$	2:12		
4. Which numbers are <b>&gt; 15</b> ? 12 14 16 18	2:4	14. What symbol is missing? $30 \div 6 \square 5$	2:12		
5. Write this number in numerals. fifty three	2:5	15. Is this true? Write 'yes' or 'no'. $10 \div 5 = 5 \div 10$	2:13		
6. There are 30 children in a class. 12 are girls. How many are boys?	2:6	16. 4 children share 32 sweets. How many sweets does each child get?	2:14	24. Which is longest? Write a, b, or c. a. an hour b. 80 minutes c. quarter of an hour	
7. $20 - 7 =$	2:7	17. 4 teams enter a 7-a-side contest. How many players are in the contest?	2:14		
8. $58 - 10 =$	2:8	18. Write the fraction <b>one half</b> in numerals.	2:15		
9. Is this true? Write 'yes' or 'no'. $17 + 18 = 18 + 17$	2:9	19. How many <b>quarters</b> are in 2 whole ones?	2:15		
10. Use $65 + 18 = 83$ to help find: $83 - 18 = \square$	2:10				
Total (A)		Total (B)		Total (C)	
Test Total (A+B+C)		R (0-9)	Y (10-19)	G (20-25)	