

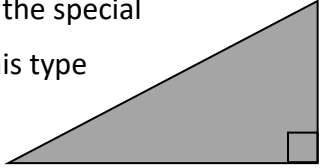


Name: \_\_\_\_\_

Date: \_\_\_\_\_

Class/Group: \_\_\_\_\_

A: Place Value, Add and Subtract		B: Multiply, Divide and Fractions		C: Measure and Geometry	
1. What is the missing number? 18 27 <input type="text"/> 45 54	4:1	11. $36 \div 6 =$	4:9	21. A plant is 73cm tall. How many more centimetres does it have to grow before it is 1 metre tall?	4:19
2. What is the missing number? 49 56 63 70 <input type="text"/>	4:1	12. Two factors of 48 add up to 16. What are they?	4:10		
3. What is 1,000 <b>more</b> than 1?	4:2	13. $257 \times 9 =$	4:11	22. Calculate the perimeter of a square that has a side length of 4.5cm.	4:20
4. Round this number to the nearest 10: 7,548	4:2	14. In a class of 25 there are 3 girls for every 2 boys. How many are boys?	4:12		
5. What is $5 - 11$ ?	4:3	15. $\frac{1}{3} = \frac{5}{?}$ 	4:13	23. Here are the heights of three brothers. Who is tallest?  <div style="display: flex; justify-content: space-around; align-items: center;"> <div style="border: 1px solid black; border-radius: 10px; padding: 5px; text-align: center;">Dave 1.3m</div> <div style="border: 1px solid black; border-radius: 10px; padding: 5px; text-align: center;">Andy 145cm</div> <div style="border: 1px solid black; border-radius: 10px; padding: 5px; text-align: center;">Phillip 1.25m</div> </div>	4:21
6. What is the value of the <b>6</b> in this number? 6,283	4:4	16. What is the missing number? 5.07 5.08 5.09 <input type="text"/>	4:14		
7. Write the number 45 in Roman numerals.	4:5	17. $\frac{9}{8} + \frac{2}{8} =$	4:15	24. How would 11:08pm be shown on a 24 hour digital clock?  <div style="border: 1px solid black; border-radius: 10px; padding: 10px; display: inline-block; margin-left: 100px;"> <span style="font-size: 2em;">:</span> </div>	4:22
8. $2,859 - 1,364 =$	4:6	18. Write 0.1 as a fraction.	4:16		
9. Write the sum to check $252 + 125 = 377$ : $377 - \text{} = \text{}$	4:7	19. $9 \div 100 =$	4:17	25. What is the special name for this type of triangle?  	4:23
10. I have £5. I spend £2.65 then 97p. How much do I have left?	4:8	20. Round 5.4 to the nearest whole number.	4:18		
Total (A)		Total (B)		Total (C)	
Test Total (A+B+C)		R (0-9)	Y (10-19)	G (20-25)	