


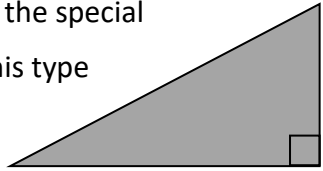



Name: _____

Date: _____

Class/Group: _____

A: Place Value, Add and Subtract		B: Multiply, Divide and Fractions		C: Measure and Geometry	
1. What is the missing number? 18 27 <input type="text"/> 45 54	4:1 36	11. $36 \div 6 =$	4:9 6	21. A plant is 73cm tall. How many more centimetres does it have to grow before it is 1 metre tall?	4:19 27cm
2. What is the missing number? 49 56 63 70 <input type="text"/>	4:1 77	12. Two factors of 48 add up to 16. What are they?	4:10 4, 12	22. Calculate the perimeter of a square that has a side length of 4.5cm.	4:20 18cm
3. What is 1,000 more than 1?	4:2 1,001	13. $257 \times 9 =$	4:11 2,313		4:21 Andy
4. Round this number to the nearest 10: 7,548	4:2 7,550	14. In a class of 25 there are 3 girls for every 2 boys. How many are boys?	4:12 10	23. Here are the heights of three brothers. Who is tallest?	4:22 23:08
5. What is $5 - 11$?	4:3 -6	15. $\frac{1}{3} = \frac{5}{?}$ 	4:13 15	<div style="display: flex; justify-content: space-around;"> <div style="border: 1px solid black; border-radius: 10px; padding: 5px;">Dave 1.3m</div> <div style="border: 1px solid black; border-radius: 10px; padding: 5px;">Andy 145cm</div> <div style="border: 1px solid black; border-radius: 10px; padding: 5px;">Phillip 1.25m</div> </div>	4:23 Right-Angle or Scalene
6. What is the value of the 6 in this number? 6,283	4:4 6,000	16. What is the missing number? 5.07 5.08 5.09 <input type="text"/>	4:14 5.1(0)	24. How would 11:08pm be shown on a 24 hour digital clock?	
7. Write the number 45 in Roman numerals.	4:5 XLV	17. $\frac{9}{8} + \frac{2}{8} =$	4:15 $\frac{11}{8}$	25. What is the special name for this type of triangle?	
8. $2,859 - 1,364 =$	4:6 1,495	18. Write 0.1 as a fraction.	4:16 $\frac{1}{10}$		
9. Write the sum to check $252 + 125 = 377$: $377 - \square = \square$	4:7 252, 125 	19. $9 \div 100 =$	4:17 0.09		
10. I have £5. I spend £2.65 then 97p. How much do I have left?	4:8 £1.38	20. Round 5.4 to the nearest whole number.	4:18 5		
Total (A)		Total (B)		Total (C)	
Test Total (A+B+C)		R (0-9)	Y (10-19)	G (20-25)	