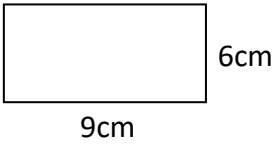
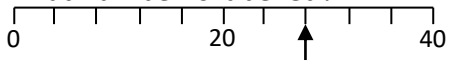

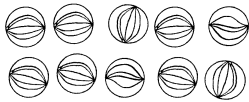




Name: _____

Date: _____

Class/Group: _____

A: Place Value, Add and Subtract		B: Multiply, Divide and Fractions		C: Measure and Problem Solving	
1. What is the missing number? 0 4 8 <input type="text"/> 16	3:1	11. $28 \div 4 =$	3:10	23. Alfie is 1m 12cm tall. Zac is 91cm tall.	3:19
2. What is the 6 worth in this number? 361	3:2	12. $8 \times 6 =$	3:10	How much taller is Alfie than Zac?	
3. Write this number in numerals. four hundred and sixty two	3:3	13. Use $9 \times 6 = 54$ to solve: $9 \times 12 =$	3:11	22. What is the perimeter of this rectangle? 	3:20
4. What number is labelled? 	3:4	14. What is the missing number? $4 \times \text{input} = 50 - 22$	3:12		
5. Make the largest number possible using the digits 6 4 8.	3:5	15. What is the missing number? 0.7 0.8 0.9 1.0 <input type="text"/>	3:13	23. Cans of pop are 60p each. I have £2. How many cans of pop can I buy? 	3:21
6. $603 - 10 =$	3:6	16. Circle $\frac{4}{10}$ of the marbles. 	3:14		
7. $723 - 312 =$	3:7	17. What is $\frac{1}{4}$ of 12?	3:15	24. Draw the hands to show twenty five minutes past eight. 	3:22
8. Circle the best estimate to $48 + 89$: 110 120 130 140	3:8	18. $\frac{1}{3} = \frac{?}{6}$ 	3:16		
9. One orange costs twenty pence. How much will five oranges cost?	3:9	19. Add the fractions. $\frac{2}{9} + \frac{5}{9}$	3:17	25. How many minutes are equal to 180 seconds?	3:24
10. What is the missing number? <input type="text"/> - 23 = 9	3:9	20. Write the smallest fraction. $\frac{1}{5}$ $\frac{1}{6}$ $\frac{1}{4}$ $\frac{1}{2}$	3:18		
Total (A)		Total (B)		Total (C)	
Test Total (A+B+C)		R (0-9)		Y (10-19)	
				G (20-25)	