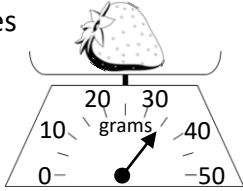
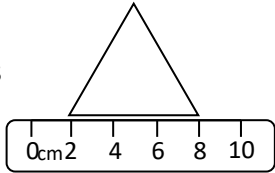
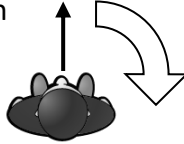
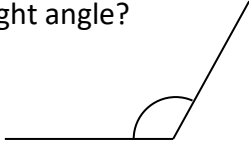
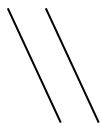
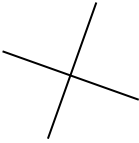


Name: _____

Date: _____

Class/Group: _____

A: Place Value, Add and Subtract		B: Multiply, Divide and Fractions		C: Measure and Geometry	
1. What is 10 more than this number? 67	3:1	11. $56 \div 8 =$	3:10	21. How much does this strawberry weigh?	3:19
2. What is the 5 worth in this number? 750	3:2	12. $12 \times 4 =$	3:10		
3. Write < or > to make this correct: 812 <input type="text"/> 796	3:3	13. $17 \times 4 =$	3:11	22. What is the perimeter of this equilateral triangle?	3:20
4. Show 18°C on the thermometer.	3:4	14. There are 3 girls for every 2 boys. If there are 12 girls, how many boys?	3:12		
5. Make the smallest number possible using the digits 2 7 and 5.	3:5	15. What is one tenth of 8?	3:13	23. Ian turns through a quarter turn. How many degrees has he turned through?	3:26
6. $459 + 1 =$	3:6	16. Circle $\frac{1}{7}$ of the marbles.	3:14		
7. $256 - 173 =$	3:7	17. What is $\frac{3}{5}$ of 25?	3:15	24. Is this angle bigger or smaller than a right angle?	3:27
8. Circle the best estimate to $102 - 69$: 15 20 25 30	3:8	18. $\frac{8}{12} = \frac{?}{3}$	3:16		
9. A school has 500 tickets to sell for a play. They sell 289. How many left?	3:9	19. Add the fractions. $\frac{3}{9} + \frac{3}{9}$	3:17	25. Which pair of lines are parallel?	3:28
10. What is the missing number? $25 + \square - 13 = 30$	3:9	20. Write the smallest fraction. $\frac{1}{5}$ $\frac{1}{3}$ $\frac{1}{7}$ $\frac{1}{2}$	3:18	a.  b. 	
Total (A)		Total (B)		Total (C)	
Test Total (A+B+C)		R (0-9)	Y (10-19)	G (20-25)	