


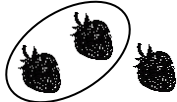
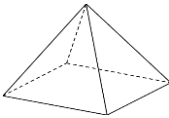
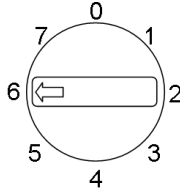


Name: _____

Date: _____

Class/Group: _____

| A: Place Value, Add and Subtract | | B: Multiply, Divide and Fractions | | C: Measure and Geometry | |
|--|------|--|-----------|---|------|
| 1. What is the missing number? 12 22 32 42 52 <input type="text"/> | 2:1 | 11. $9 \times 5 =$ | 2:11 | 21. Which of these has the greatest capacity? a. a bath b. a bucket c. a cup | 2:18 |
| 2. Circle the 3s that have a value of 3 . 13 38 43 31 | 2:2 | 12. Which are the odd numbers? 2 7 16 23 | 2:11 |  | |
| 3. What number is labelled?  | 2:3 | 13. What symbol is missing? 3×5 <input type="text"/> 15 | 2:12 | 22. How many minutes are there in 1 hour ? a. 12 b. 24 c. 60 | 2:21 |
| 4. Put these in order, smallest first. 34 4 43 3 | 2:4 | 14. What symbol is missing? 14 <input type="text"/> 7 = 2 | 2:12 |  | |
| 5. Write this number in words. 71 | 2:5 | 15. Is this true? Write 'yes' or 'no'. $15 \div 3 = 3 \div 15$ | 2:13 | 23. Which of these shapes has 4 sides ? a. triangle b. circle c. square | 2:23 |
| 6. A garden has 15 trees. 9 more are planted. How many trees now? | 2:6 | 16. 4 flowers each have 7 petals. How many petals are there in total? | 2:14 | | |
| 7. Use $11 + 9 = 20$ to answer: $55 +$ <input type="text"/> $= 100$ | 2:7 | 17. I have 18 eggs. If they come in boxes of 6, how many boxes do I have? | 2:14 | 24. Complete the sentence: A square based pyramid has 8 a. vertices b. edges c. faces | 2:24 |
| 8. $9 + 7 + 8 =$ | 2:8 | 18. What fraction of the strawberries is circled?  | 2:15 |  | |
| 9. Tick (✓) if true: $28 - 7 = 7 - 28$ <input type="checkbox"/> $38 + 6 = 6 + 38$ <input type="checkbox"/> | 2:9 | 19. Write the fraction two quarters in numerals. | 2:15 | 25. This dial is pointing at 6. What number will it point to after being turned clockwise through 3 right angles ?  | 2:28 |
| 10. Use $62 - 17 = 45$ to help find: $17 + 45 =$ <input type="text"/> | 2:10 | 20. What is $\frac{1}{4}$ of 20 ? | 2:16 | | |
| Total (A) | | Total (B) | | Total (C) | |
| Test Total (A+B+C) | | R (0-9) | Y (10-19) | G (20-25) | |