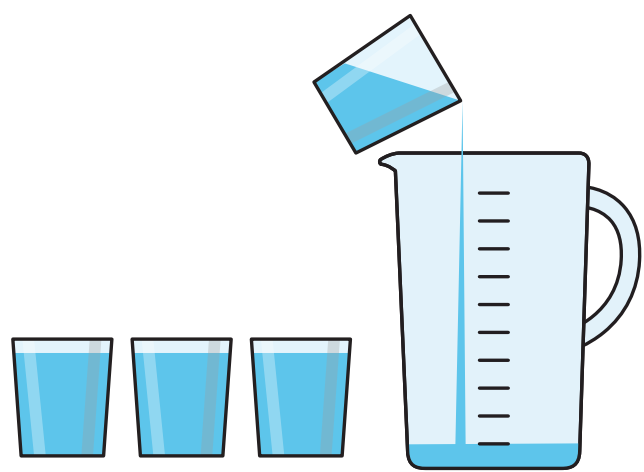


Measure capacity




I 4 glasses of water fill 1 jug.



a) How many glasses will fill 2 jugs?

8

b) Eva uses 20 glasses of water.




How many jugs can she fill?

Eva can fill 5 jugs.

2 Teddy pours these 6 glasses of juice.

He uses a whole bottle of juice.




The bottle has a capacity of 6 glasses.


Do you agree with Teddy? No

Talk about it with a partner.

3 It takes 8 glasses of water to fill a jug.



It takes 3 jugs of water to fill a bucket.



How many **glasses** of water fill a bucket?

24

What else can you find out?

