
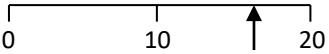
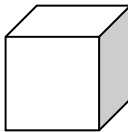




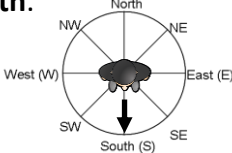


Name: \_\_\_\_\_

Date: \_\_\_\_\_

Class/Group: \_\_\_\_\_

A: Place Value, Add and Subtract		B: Multiply, Divide and Fractions		C: Measure and Geometry	
1. What is the missing number? 0 5 10 15 20 <input type="text"/>	2:1	11. $4 \times 10 =$	2:11	21. What <b>units</b> would you use to measure the <b>mass</b> of a pencil? a. centimetres b. grams c. millimetres	2:17
2. What is the <b>value</b> of the <b>6</b> in this number? 56	2:2	12. $18 \div 2 =$	2:11		
3. <b>Estimate</b> the number labelled. 	2:3	13. What symbol is missing? $45 \div 5$ <input type="text"/> 9	2:12	22. How many <b>faces</b> does a <b>cube</b> have? a. 6 b. 8 c. 12	2:24
4. Use <, > or = to make this correct: 28 <input type="text"/> 13	2:4	14. What symbol is missing? 7 <input type="text"/> 3 = 21	2:12		
5. Write this number in numerals. eighty four	2:5	15. Tick (✓) if true: $3 \times 4 = 4 \times 3$ <input type="checkbox"/> $20 \div 2 = 2 \div 20$ <input type="checkbox"/>	2:13	23. Name the shaded face on this <b>cylinder</b> . 	2:25
6. There are 20 sweets in a bag. Tom eats 13 of them. How many are left?	2:6	16. £12 is shared between 3 people. How much does each person get?	2:14		
7. $7 +$ <input type="text"/> $= 20$	2:7	17. 6 cars each have 2 people in them. How many people are in the cars?	2:14	24. Tick (✓) the shape that <b>does not</b> contain a <b>right-angle</b> . 	2:26
8. $52 - 18 =$	2:8	18. Circle <b>two thirds</b> of the strawberries. 	2:15		
9. Is this true? Write 'yes' or 'no'. $15 - 6 = 6 - 15$	2:9	19. Shade in $\frac{3}{4}$ of the shape. 	2:15	25. Ben is facing <b>South</b> . What direction will he be facing after turning through <b>2 right angles</b> ? 	2:28
10. Use $49 + 24 = 73$ to help find: $73 - 49 =$ <input type="text"/>	2:10	20. What is $\frac{1}{3}$ of 12 ?	2:16		
Total (A)		Total (B)		Total (C)	
Test Total (A+B+C)		R (0-9)	Y (10-19)	G (20-25)	