

Fluent in Five

Questions and Answers

Year 2

Week 9

Year 2 – Week 9

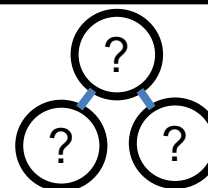
This week in a nutshell:

This week, the Year 2 multiplication is introduced for the first time. Children will be expected to use their multiplication facts for the 2, 5 and 10 times tables, including questions written using the multiplication symbol.

Children will also continue to experience questions which focus on areas from previous weeks of Year 2 Fluent in Five, including Year 2 addition and subtraction.


A. $47 + 29 =$

Use...

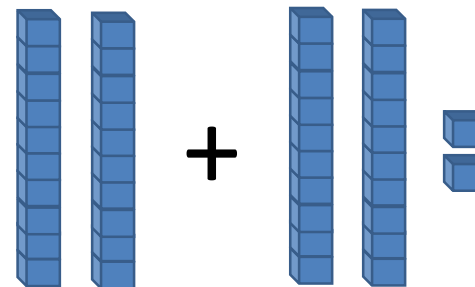


Part-Whole Model
...to help you

B. $3 \times 10 =$



C. $20 + 22 =$





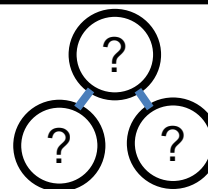
THIRD SPACE
LEARNING

Year 2

Week 9 – Day 1 (Answers)

$$A. 47 + 29 = 76$$


Use...



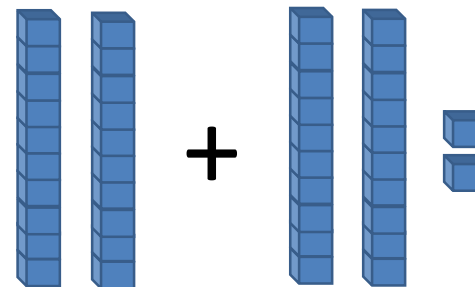
Part-Whole Model

...to help you

$$B. 3 \times 10 = 30$$



$$C. 20 + 22 = 42$$




Fluent in Five

Questions and Answers

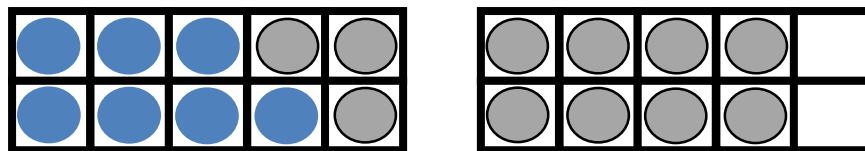
Week 9

Day 2

A. $9 \times 5 =$



B. $18 - 11 =$



C. $18 + 42 =$

You choose...

...what to use...

...to help you




THIRD SPACE
LEARNING

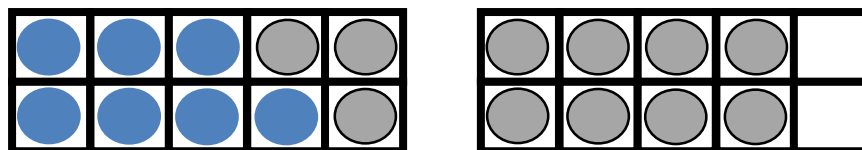
Year 2

Week 9 – Day 2 (Answers)

$$A. 9 \times 5 = 45$$



$$B. 18 - 11 = 7$$



$$C. 18 + 42 = 60$$

You choose...

...what to use...

...to help you


Fluent in Five

Questions and Answers


Week 9

Day 3

A. $8 \times 2 =$

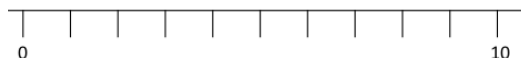


B. $3 + 8 + 8 =$



C. $56 + 17 =$


Use...




A number line

...to help you

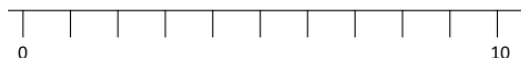
$$A. 8 \times 2 = 16$$



$$B. 3 + 8 + 8 = 19$$



Use...



$$C. 56 + 17 = 73$$

A number line

...to help you

Fluent in Five

Questions and Answers

Week 9

Day 4

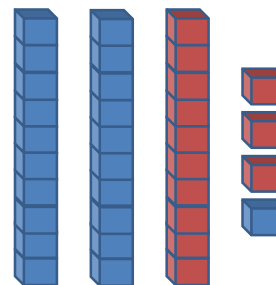
A. $11 \times 10 =$

You choose...


...what to use...

...to help you

B. $34 - 13 =$



C. $3 + 4 + 5 =$





THIRD SPACE
LEARNING

Year 2

Week 9 – Day 4 (Answers)

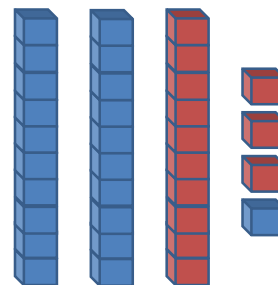
You choose...

$$A. 11 \times 10 = 110$$


...what to use...

...to help you

$$B. 34 - 13 = 21$$



$$C. 3 + 4 + 5 = 12$$



Fluent in Five

Questions and Answers

Week 9

Day 5



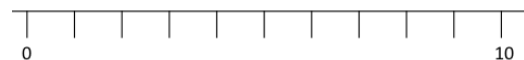
THIRD SPACE
LEARNING

Year 2

Week 9 – Day 5

$$A. 44 + 29 =$$

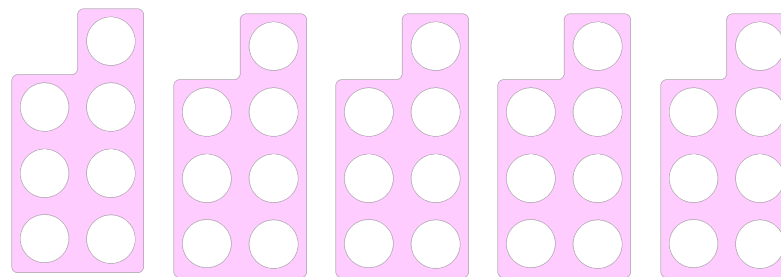
Use...



A number line

...to help you

$$B. 7 \times 5 =$$



You choose...

$$C. 7 + 9 + 3 =$$

...what to use...

...to help you



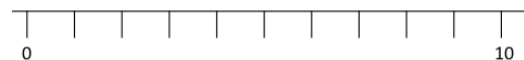
THIRD SPACE
LEARNING

Year 2

Week 9 – Day 5 (Answers)

$$A. 44 + 29 = 73$$

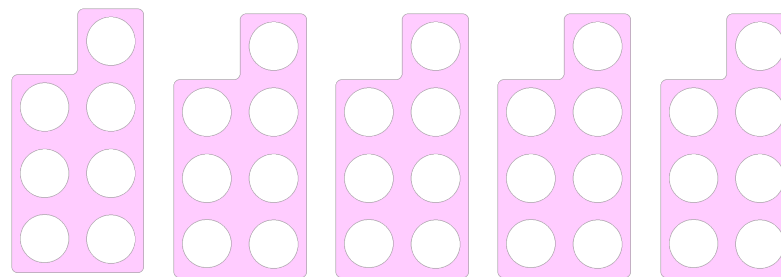
Use...



A number line

...to help you

$$B. 7 \times 5 = 35$$



You choose...

$$C. 7 + 9 + 3 = 19$$

...what to use...

...to help you