
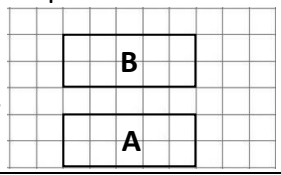
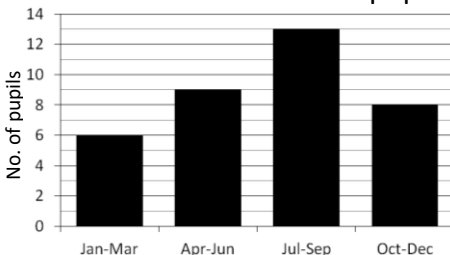
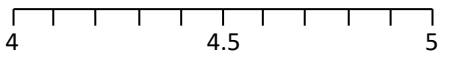


Name: _____

Date: _____

Class/Group: _____

A: Place Value, Add and Subtract		B: Multiply, Divide and Fractions		C: Measure, Geometry and Statistics	
1. What is the missing number? 18 24 <input type="text"/> 36 42	4:1	11. $7 \times 9 =$	4:9	21. What is the area of this shape? 	4:20
2. What is the missing number? 2000 3000 4000 <input type="text"/>	4:1	12. Circle the sum that is the same as 16×7 : $4 \times 7 \times 4$ $2 \times 8 \times 6$	4:10	22. Circle the name that describes a 90° angle. Right angle Obtuse angle Acute angle	4:24
3. Round this number to the nearest 100: 3,192	4:2	13. $138 \times 9 =$	4:11		
4. What is 1,000 less than 10,293?	4:2	14. To work out 9×58 you could do: <input type="text"/> $\times 9 + 8 \times$ <input type="text"/>	4:12	23. To transform shape A onto B: Translate A <input type="text"/> units <input type="text"/> . 	4:27
5. What is 12 less than 4?	4:3	15. Circle the equivalent fraction to $\frac{1}{9}$. $\frac{3}{27}$ $\frac{4}{18}$ $\frac{5}{36}$	4:13		
6. What is the value of the 2 in this number? 6,283	4:4	16. Complete the sequence: $\frac{37}{100}$ $\frac{38}{100}$ $\frac{39}{100}$ <input type="text"/>	4:14	24. Month of birth of Class 7 pupils. 	4:29
7. Write the number 91 in Roman numerals.	4:5	17. $\frac{4}{3} + \frac{1}{3}$	4:15		
8. $2,472 - 598 =$	4:6	18. Write 0.01 as a fraction.	4:16	How many were born in the first half of the year? 25. How many pupils are in Class 7?	4:30
9. Write the sum to check $3,250 - 975 = 2,275$: $3,250$ <input type="text"/> 975 <input type="text"/> $2,275$	4:7	19. $11 \div 10 =$	4:17		
10. There are 73 people on a bus. 15 get off & 28 get on. How many now?	4:8	20. Label 4.95cm on the ruler section: 	4:18		
Total (A)		Total (B)		Total (C)	
Test Total (A+B+C)		R (0-9)	Y (10-19)	G (20-25)	